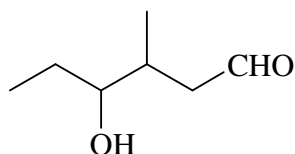


Jeudi 4 novembre 2004

INTERROGATION ÉCRITE DE CHIMIE

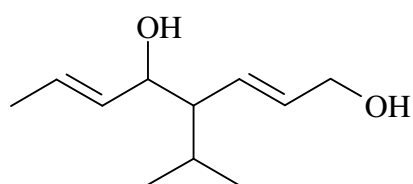
Nommer les molécules suivantes :

1)



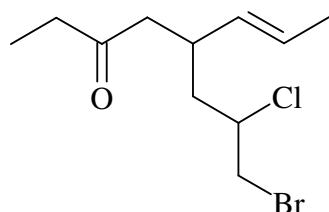
4-hydroxy-3-méthylhexanal

2)



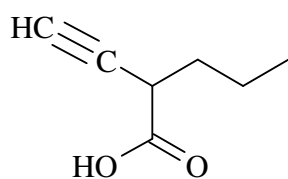
4-isopropylocta-2,6-diène-1,5-diol

3)



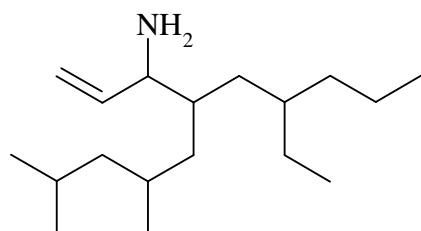
5-(3-bromo-2-chloropropyl)oct-6-én-3-one

4)



acide 2-propylbut-3-ynoïque

5)



4-(2-éthylpentyl)-6,8-diméthylnon-1-én-3-amine